

Candidate Name	Centre Number	Candidate Number
		0



**GCSE**

185/08

**MATHEMATICS  
FOUNDATION TIER  
PAPER 2**

A.M. FRIDAY, 12 November 2010

2 hours

**ADDITIONAL MATERIALS**

A calculator will be required for this paper.

**INSTRUCTIONS TO CANDIDATES**

Write your name, centre number and candidate number in the spaces at the top of this page.

Answer **all** the questions in the spaces provided.

Take  $\pi$  as 3.14 or use the  $\pi$  button on your calculator.

**INFORMATION FOR CANDIDATES**

You should give details of your method of solution especially when a calculator is used.

Unless stated, diagrams are not drawn to scale.

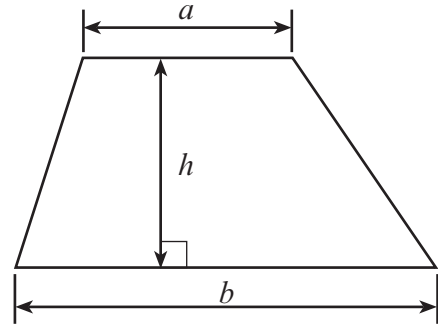
Scale drawing solutions will not be acceptable where you are asked to calculate.

The number of marks is given in brackets at the end of each question or part-question.

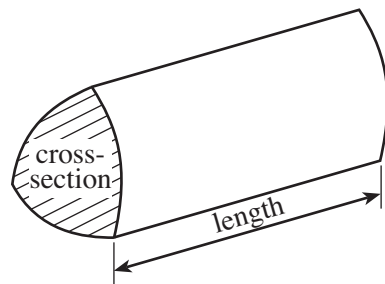
For Examiner's use only		
Question	Maximum Mark	Mark Awarded
1	8	
2	4	
3	6	
4	4	
5	4	
6	6	
7	4	
8	3	
9	4	
10	4	
11	6	
12	4	
13	4	
14	4	
15	5	
16	6	
17	5	
18	8	
19	3	
20	4	
21	4	
<b>TOTAL MARK</b>		

**Formula List**

**Area of trapezium** =  $\frac{1}{2}(a + b)h$



**Volume of prism** = area of cross-section  $\times$  length



1. (a) (i) Complete the following bill.

Item	Cost
3 kg of apples @ £1.35 per kg	£ 4.05
4 jars of jam @ £1.31 each	£
3 kg leeks @ £1.62 per kg	£
500 g mushrooms @ 25p per 100 g	£
Total	£

- (ii) Chris gets a 5% discount.  
How much discount does he get off the bill?

.....

.....

.....

.....

[6]

- (b) Mr. Hughes buys a newspaper costing 35p every day from Monday to Friday for 4 weeks.  
How much does this cost altogether?

.....

.....

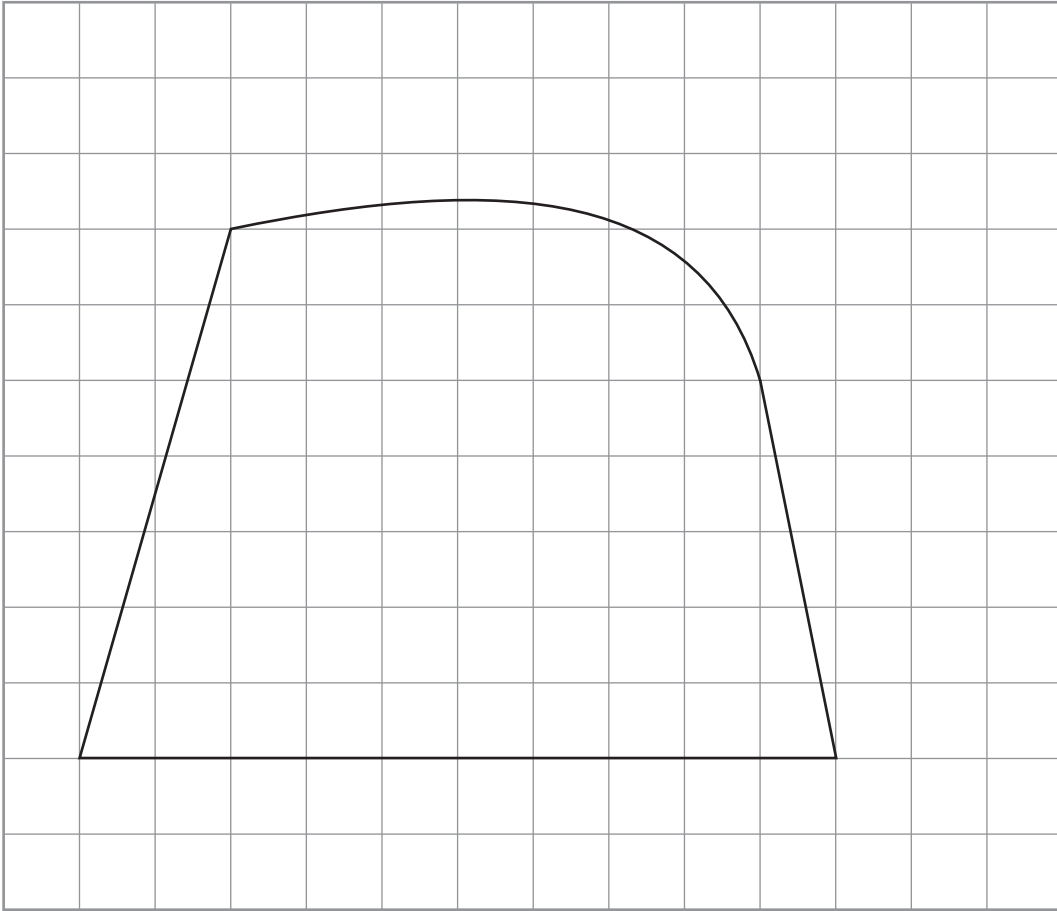
.....

.....

.....

[2]

2. (a)



The above shape has been drawn on a square grid.  
By counting squares, estimate the area of the above shape.

.....

.....

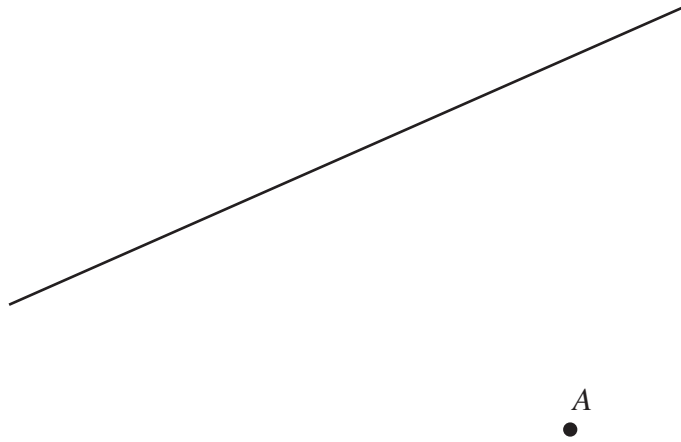
.....

.....


Area of the shape = .....

[2]

- (b) (i) On the diagram below, draw a line through the point  $A$  that is perpendicular to the given line.



- (ii) Write down the name of the following shape.



.....

[2]

3. The table shows the postal charges for using the Special Delivery (next day) service offered by the Post Office.

**Special Delivery Postage Calculator**

Weight not over	Next day delivery on			
	Monday – Friday		Saturday	
	by 9 a.m.	by 1 p.m.	by 9 a.m.	by 1 p.m.
100 g	£10.85	£4.95	£13.05	£7.15
500 g	£12.65	£5.40	£14.85	£7.60
1 kg	£14.75	£6.70	£16.95	£8.90
2 kg	£18.30	£8.65	£20.50	£10.85
10 kg		£21.65		£23.85

- (a) Alice posts a package that weighs 400 g on Tuesday for delivery by 9 a.m. the next day. How much did it cost?

..... [1]

- (b) A package weighs 850 g. It is posted on Thursday. How much more does it cost to send this package to be delivered by 9 a.m. the next day rather than by 1 p.m. the next day?

..... [3]

- (c) John goes to the Post Office on a Friday. He wants to post a package weighing 7 kg which **must** arrive by the next day and by 9 a.m. if possible. Explain **fully** what John should be told at the Post Office about delivery and cost.

..... [2]

4. The diagram shows a scale with 10 and 70 marked on it. Find the values that should be shown on the scale at the points marked *A*, *B*, *C* and *D*.



*A* = .....

*B* = .....

*C* = .....

*D* = .....

[4]

5. The formula for the cost of buying a television on credit is

$$\text{Cost of buying a television} = 36 \times \text{Monthly payment} + \text{Deposit}$$

- (a) Find the **Cost of buying a television** when the **Monthly payment** is £40 and the **Deposit** is £30.

.....

.....

.....

.....

[2]

- (b) Find the **Deposit**, when the **Cost of buying a television** is £1330 and the **Monthly payment** is £35.

.....

.....


.....

.....

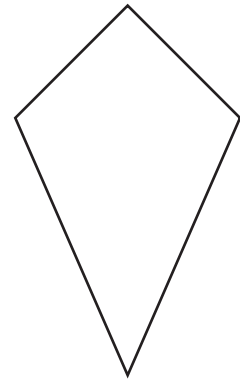
[2]

6. (a) Draw **all** the lines of symmetry on the following shape.

[2]



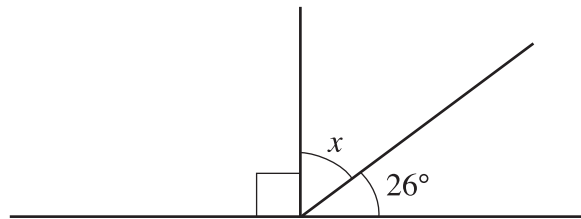
(b) (i) Tick (✓) the shape that has exactly one line of symmetry.



(ii) Write down the name of the shape that you ticked.

..... [2]

(c) Find the size of the angle marked  $x$ .



*Diagram not drawn to scale*

.....  
 .....


$x = \dots\dots\dots^\circ$

[2]



7. (a) Complete an accurate drawing of triangle  $PQR$  in which  $QR = 12$  cm,  $PQ = 9$  cm and angle  $PQR = 54^\circ$ .  
The side  $QR$  has been drawn for you.

[3]



- (b) Write down the special name given to angles which are more than  $90^\circ$  and less than  $180^\circ$ .

[1]

8. Complete the following table.  
The first row has been completed for you.

Place	Temperature at 10 p.m.	Change	Temperature at 10 a.m. next day
Aberystwyth	$-1^{\circ}\text{C}$	Up $4^{\circ}\text{C}$	$3^{\circ}\text{C}$
Bangor	$-3^{\circ}\text{C}$		$0^{\circ}\text{C}$
Cardiff	$-4^{\circ}\text{C}$	Down $3^{\circ}\text{C}$	
Denbigh		Up $4^{\circ}\text{C}$	$-1^{\circ}\text{C}$

[3]

9. The numbers of pupils on eight school buses are:

45    36    14    41    29    52    18    37

- (a) Find the mean number of pupils on a bus.

.....

.....

.....

.....

[3]

- (b) Find the range of the number of pupils on a bus.

.....

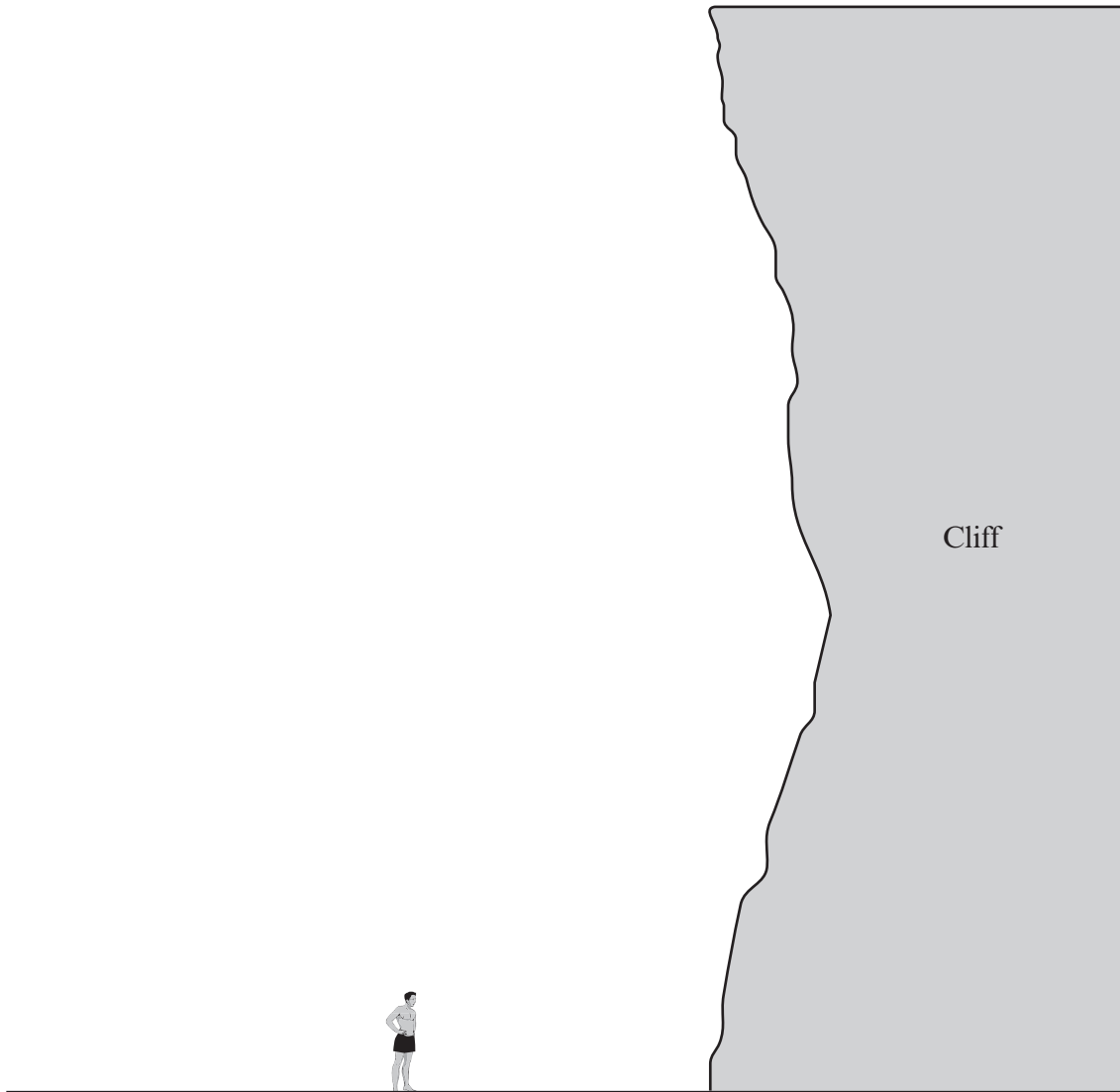
.....

.....

.....

[1]

10.



The above picture shows a man standing on a beach in front of a cliff.

Write down an **estimate** for the **actual height** of the man. ....

Using this estimate for the height of the man, estimate the **actual height** of the cliff, **showing all your working**.

.....

.....

.....

.....

.....

.....

.....

.....

.....

.....

11. (a) Use the formula  $F = 3W + 2T$  to find the value of  $F$  when  $W = 8$  and  $T = 6$ .

.....  
.....  
.....

[2]

- (b) Solve **each** of the following equations.

(i)  $x + 7 = 12$

(ii)  $\frac{y}{3} = 6$

.....  
.....

[2]

- (c) Simplify  $3x + 5y - x + 2y$ .

.....  
.....  
.....

[2]

12. The number of sweets in each of 50 bags is counted.  
The results are summarised in the following table.

Number of sweets	23	24	25	26	27
Frequency	9	12	16	10	3

- (a) What is the probability that a randomly chosen bag has at least 25 sweets in it?

.....  
 ..... [2]

- (b) How many sweets are there altogether?

.....  
 .....  
 .....  
 .....  
 ..... [2]


13. The total cost of 2.5 kg of apples and 1.4 kg of pears is £6.72.  
The cost of 1 kg of pears is £1.55.  
Find the cost of 1 kg of apples.

.....  
 .....  
 .....  
 .....  
 .....  
 .....  
 ..... [4]

14. The table shows the continents in four groups and the approximate area of each group.

Group	Area in million square miles
North and South America	17
Europe and Asia	22
Australia and Antarctica	9
Africa	12

Draw a pie chart to illustrate these data. You should show how you calculate the angles of your pie chart.



.....

.....

.....

.....

.....

.....

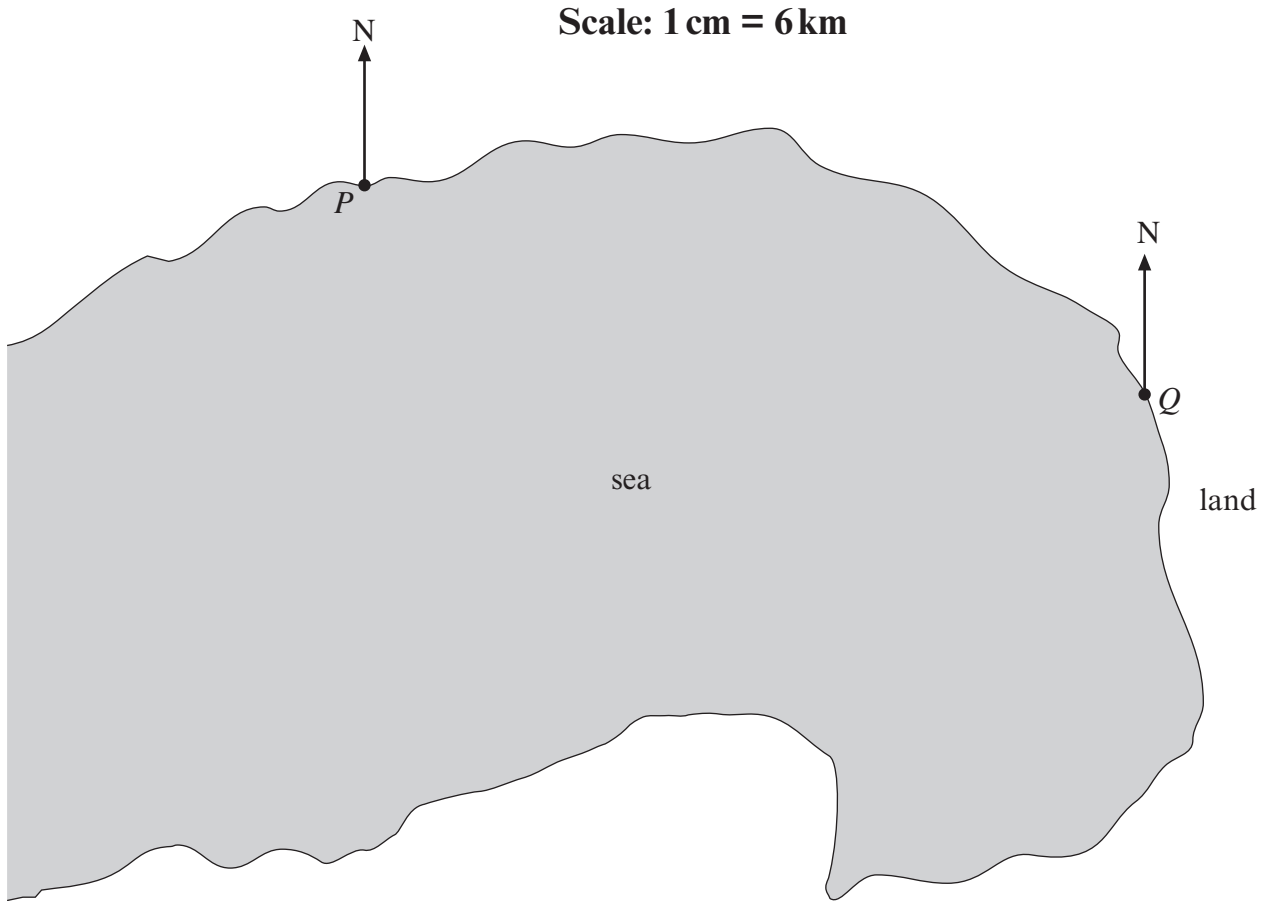
.....

.....

.....

.....

15. (a) Two ports  $P$  and  $Q$  are shown on the map below, which is drawn to scale. Find the **actual** distance between the two ports.



.....

.....

.....

.....

[3]

- (b) A ship is on a bearing of  $152^\circ$  from  $P$  and at a distance of 48 km from  $Q$ . Plot the position of the ship and mark it  $X$ .

[2]

16. Mr. Williams' electricity account with Energy UK, with some of the entries removed, is shown below.  
He pays for his electricity by monthly direct debit payments. He gets a discount of £26.25 for paying in that way. Use the information given on the account to complete all of the missing entries and to calculate the balance in Mr Williams' account.

<i><b>Energy UK</b></i>		<b>Electricity Account</b>			
<i>Period: 1<sup>st</sup> July 2010 to 30<sup>th</sup> September 2010</i>					
Mr. Williams 54 Alder Road Cardiff					
Meter reading last time	Meter reading this time	Tariff C-Customer reading E-Estimated reading	Units used	Price of each unit in pence	Amount £
<b>4865</b>	<b>6469</b>	Units used	.....	12.5	.....
		Quarterly charge			30.26
		Total charge before V.A.T.			.....
		V.A.T. at 5% of the total charge			.....
		Balance from previous quarter			17.82
		Total to pay			.....
		<i><b>Payments received</b></i>			
		Direct Debit Discount			26.25 <b>CR</b>
		Payment received 28 <sup>th</sup> July 2010			80.00 <b>CR</b>
		Payment received 28 <sup>th</sup> August 2010			80.00 <b>CR</b>
		Payment received 28 <sup>th</sup> September 2010			80.00 <b>CR</b>
		Balance to carry forward to next quarter			.....

Working.

.....

.....

.....

.....

.....

[6]





18. (a) Complete the table.

$3x$	33
$x$	11
$2c - 3$	17
$c$	
$c - a$	3
$a$	
$a + b$	12
$b$	
$c + b$	

[4]

(b) The  $n$ th term of a sequence is  $n^2 + 3$ .  
Write down the first three terms of the sequence.

.....

.....

.....

.....

.....

[2]

(c) Write down the  $n$ th term of the sequence 8, 15, 22, 29, 36, ...

.....

.....

.....

[2]



